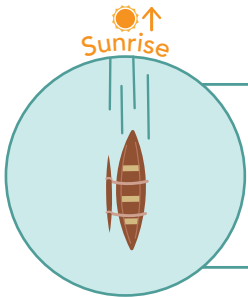



WHICH WAY ARE WE GOING?

Figure out which way the wa'a is heading by using the sun as your reference point. First figure out 'Ākau and Hema, then Komohana and Hikina. Remember, once we can determine one cardinal point, we can find all the others.



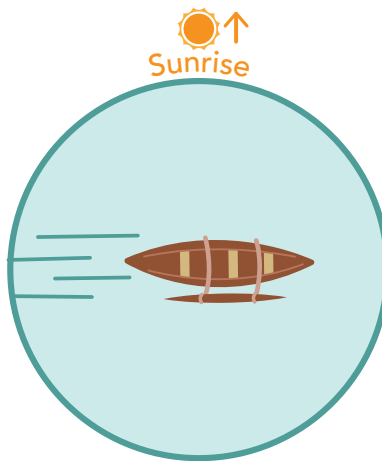
EXAMPLE:

If the sun is rising due Hikina (East) and the sun is directly behind the canoe, the canoe is pointed toward Komohana (West).



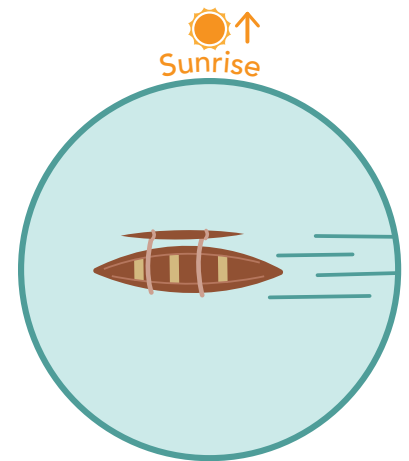
The wa'a is pointing

_____.



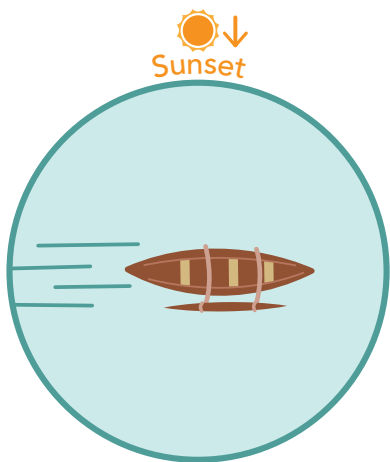
The wa'a is pointing

_____.




The wa'a is pointing

_____.



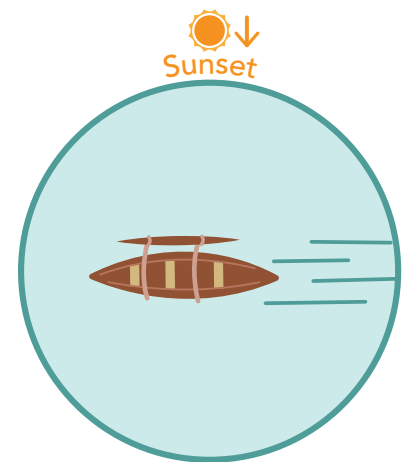
The wa'a is pointing

_____.



The wa'a is pointing

_____.



The wa'a is pointing

_____.